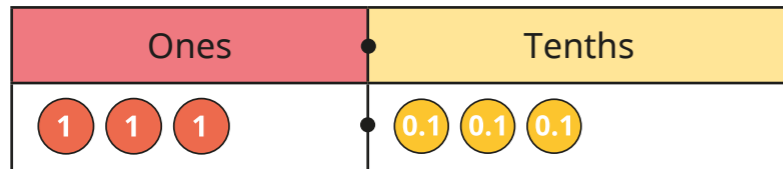
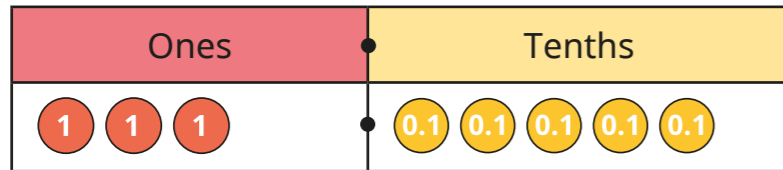
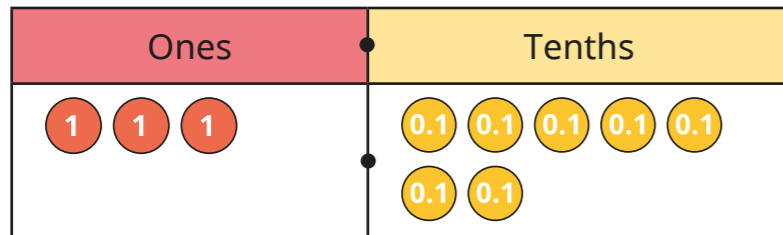


1 Esther has made a sequence with place value counters.

a) Write the numbers she has made.

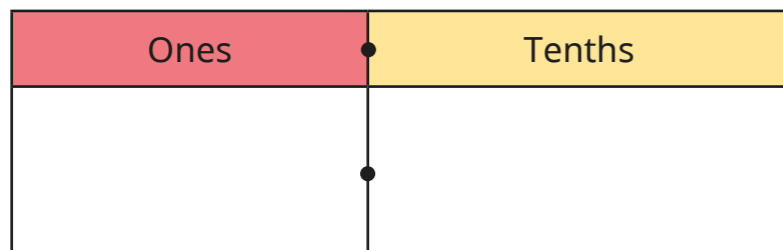






b) She adds the same counters again.

Draw counters to show the number she has made.



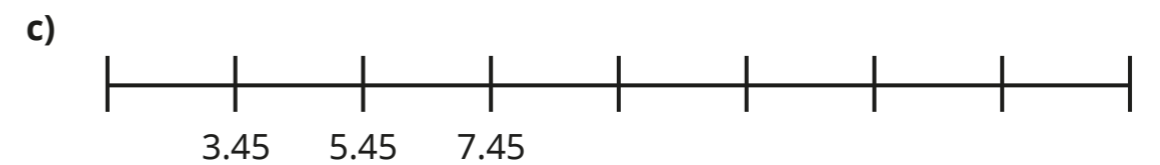
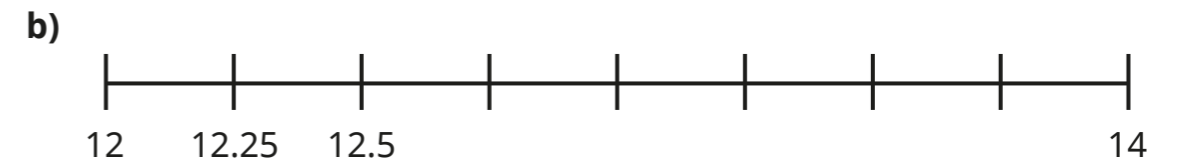
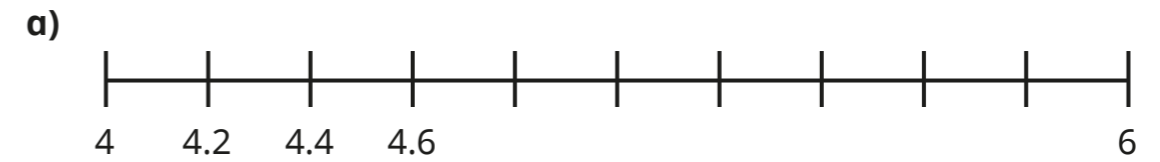
c) She adds the same counters again.

What number is shown in her chart now?

d) Explain the pattern of numbers that Esther has made.



2 Complete the number lines.



Discuss with your partner how each number line increases.

3 Write the rule for each sequence.

a) 0.1, 0.4, 0.7, 1, 1.3 _____

b) 2.15, 2.2, 2.25, 2.3, 2.35 _____

c) 5.8, 5.4, 5, 4.6, 4.2 _____

d) 10.98, 10.86, 10.74, 10.62, 10.5 _____



4 Write the rule and the next four numbers in each sequence.

a) The rule is _____

2.36	2.39	2.42				
------	------	------	--	--	--	--

b) The rule is _____

15.6	16.1	16.6				
------	------	------	--	--	--	--

c) The rule is _____

19	18.4	17.8				
----	------	------	--	--	--	--

d) The rule is _____

10.35	10.15	9.95				
-------	-------	------	--	--	--	--

5 Rosie saves money in her money box.

Each day she puts in 70 pence.

At the start of the week, she has £2.80 in her money box.



a) Complete the table to show how much is in the money box at the end of each day.

Day	Mon	Tues	Wed	Thur	Fri	Sat	Sun
Money in money box							

b) Rosie wants to buy a book costing £10

For how many more days does Rosie need to save 70p?

6 Dexter has £12 on Monday morning.
Every day, he spends 75p on a snack.
On what day of the week will he run out of money?

7 Mo and Eva are making number sequences.

a) Mo is adding 1.5 each time.

He starts with the number 3.8

What is the first number greater than 12 that he makes?

b) Will the number 15.7 be in Mo's sequence?

c) Eva's sequence decreases by 2 hundredths each time.

She picks a number to start with.

What is the difference between the 3rd and 6th numbers in her sequence?